

Mixed Bills - PRACTICE

Directions: How much money is shown in the pictures?


1.



2.



3.



1. In your own words, what is this sign letting you know about?

2. Where might you see a sign like this?

3. If you are a female which bathroom would you go to - the one on the left or right?



Cheesy Bread



1. How long should you cook this meal for?

2. Should you use a microwave or an oven?

3. What temperature should you heat it to?

4. What are you supposed to do after you take the bread out of the packaging?

5. Can you eat the bread right after you take it out?



The image shows a sign for Wendy's restaurant hours. At the top left is the Wendy's logo, a girl with pigtails. To its right, the text 'RESTAURANT HOURS' is written in white on a red background. Below this, the sign is divided into two columns: 'DINING ROOM' and 'PICK-UP WINDOW'. Each column lists hours for the days of the week: MON, TUES, WED, THURS, FRI, SAT, and SUN. The dining room hours are generally from 10:30 AM to 10:00 PM, except for Friday and Saturday which go until 11:00 PM. The pick-up window hours are from 10:30 AM to 11:00 PM, except for Friday and Saturday which go until 12:00 AM. At the bottom of the sign, there is a red banner with the Wendy's logo and the website 'WWW.WENDYS.COM/JOBS'.

	DINING ROOM	PICK-UP WINDOW
MON	10:30 AM - 10:00 PM	10:30 AM - 11:00 PM
TUES	10:30 AM - 10:00 PM	10:30 AM - 11:00 PM
WED	10:30 AM - 10:00 PM	10:30 AM - 11:00 PM
THURS	10:30 AM - 10:00 PM	10:30 AM - 11:00 PM
FRI	10:30 AM - 11:00 PM	10:30 AM - 12:00 AM
SAT	10:30 AM - 11:00 PM	10:30 AM - 12:00 AM
SUN	10:30 AM - 10:00 PM	10:30 AM - 11:00 PM

WWW.WENDYS.COM/JOBS

1. What store is this for? (Hint: look near the bottom)

2. Why are there two sets of hours of operation listed?

3. What time does the pick-up window close on Saturday?

4. What time does this store open?

5. What time does the pick-up window close on most days?



1⁹⁹
with card

How much would 4 bottles of mayonnaise cost?



89^c
with card

How much would 7 cans of beans cost?



3⁹⁹
with card

How much would 3 bags of bread cost?



99^c
with card

How much would 2 bags of cat food cost?

Route 130

Monday – Friday

To Lynnwood Transit Center

Edmonds Station Bay 4	100th W & Edmonds Way	Aurora Village Transit Center Bay 5	Mountlake Terrace Transit Center Bay 4	Lynnwood Transit Center
5	4	3	2	1
5:21	5:27	5:37	5:45	5:56
5:51	5:57	6:07	6:15	6:26
6:21	6:27	6:37	6:45	6:56
6:48	6:54	7:04	7:12	7:25
7:18	7:24	7:34	7:42	7:55
7:48	7:54	8:04	8:12	8:25
8:18	8:24	8:34	8:42	8:55
8:48	8:54	9:04	9:12	9:25
9:18	9:24	9:34	9:42	9:55
9:48	9:54	10:04	10:12	10:25

1. WHAT IS THE ROUTE NUMBER?

2. HOW MANY STOPS ARE ON THIS ROUTE?

3. WHAT CITY IS THIS BUS GOING TO?

4. CIRCLE THE TIME 6:54 ON THE SCHEDULE.

5. WHAT STOP IS IT AT?

6. WHERE ARE YOU AT STOP 1?

Name:

Date:

WORD OF THE DAY:

THAW

DEFINITION

To let frozen food
come to room
temperature

EXAMPLES

You are responsible for
dinner and have to thaw
chicken. What are three
ways you can thaw the
meat?

-
-
-

SKETCH

QUESTION

Which method do you prefer
the most for THAWING frozen
items out?

.....

SENTENCE

Write a sentence using the word
THAW.

.....

.....

RECEIPT
#####

<u>ORDER</u>	<u>QTY</u>	<u>PRICE</u>
Burger	2	\$11.98
Pie	1	\$4.29
Brownie	1	\$4.99

SUBTOTAL \$21.26

TAX \$1.83

=====

TOTAL \$23.09



FAMILY DINER

MENU # 8

You order a burger and two slices of pie. You also get an ice cream brownie to go.

What is wrong with the receipt?

Fix the mistake on the receipt.

What should the NEW total be?



What is the name of this medicine?

What flavor is this medicine?

How many tablets/capsules are in this medicine?

Why would you take this medicine?

Is this a liquid or a pill?

Name: _____

Date: _____

RECIPE TIME:

English Muffin Pizzas

Ingredients:

- 4 Thomas Whole Wheat English Muffins, split and toasted
- 1 and 1/2 cups pizza sauce
- 1 to 2 cups shredded mozzarella or Monterey jack cheese



Choice of Toppings:

Thinly sliced green peppers, onions, mushrooms, pitted ripe olives, pineapple bits, pepperoni, crumbled cooked sausage, diced smoked turkey

Directions:

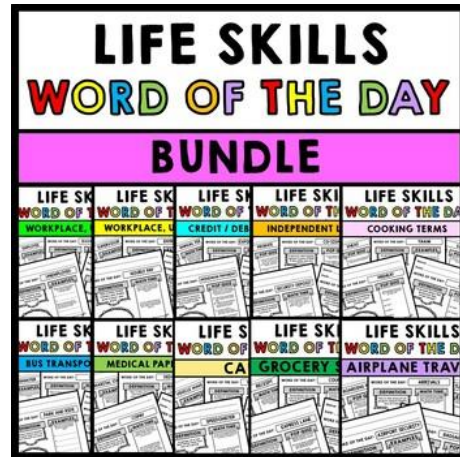
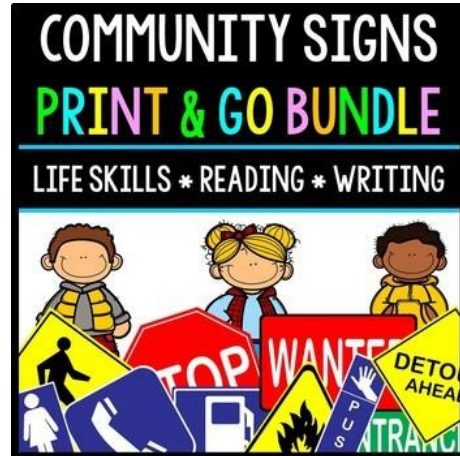
Spread 2 tablespoons pizza sauce on each muffin half; add desired toppings. Sprinkle with cheese. Place on a large baking sheet. Bake in a 400 degree oven for 10 to 12 minutes or until heated through.

1. What temperature should the oven be to make these?

2. What are the 2 types of cheese you can use?

3. How much pizza sauce goes on each muffin half?

Interested in Purchasing These Lessons? Click Below To Get Them!



Cover Graphics Provided By:

Ashley Hughes: <https://www.teacherspayteachers.com/Store/Ashley-Hughes-Design>

Jena Hudson: <https://www.teacherspayteachers.com/Store/Jena-Hudson-At-Sew-Much-Music>

Whimsy Clips: <https://www.teacherspayteachers.com/Store/Whimsy-Clips>

Instruct and Inspire: <https://www.teacherspayteachers.com/Store/Instruct-And-Inspire>

